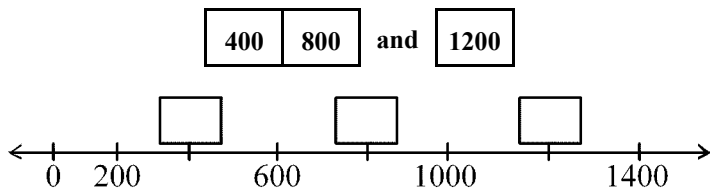
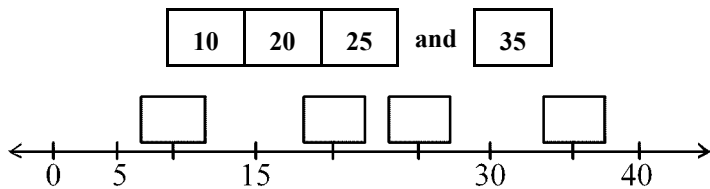
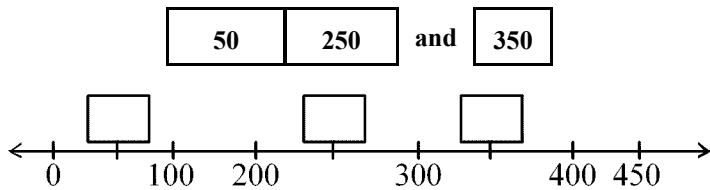
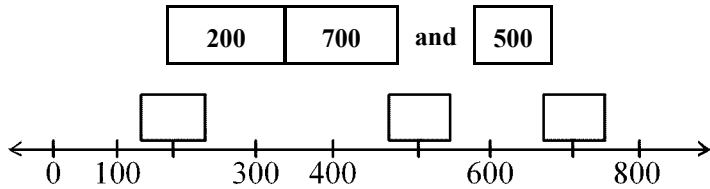
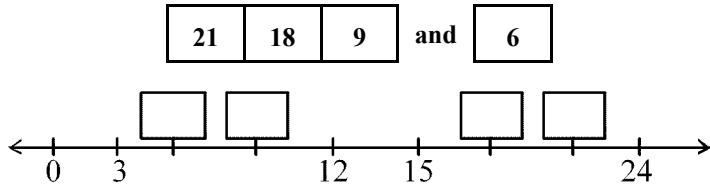


Time: 10 Minutes	Paper Math 3 (T - 2)	Total Marks: 10
1st Month, 3rd Week, 2nd Day		Syllabus: Unit1: Exercise No.4. Q.No. 3

Q.No.1. Place the correct number card on the number line. ($2 \times 5 = 10$)

صحیح عدد کو نمبر لائن پر لگائیں۔



Time: 10 Minutes	Paper Math 3 (T - 2)	Total Marks: 10
1st Month, 3rd Week, 2nd Day		Syllabus: Unit1: Exercise No.4. Q.No. 3

Q.No.1. Place the correct number card on the number line. ($2 \times 5 = 10$)

صحیح عدد کو نمبر لائن پر لگائیں۔

